

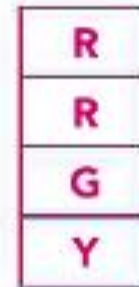
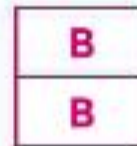
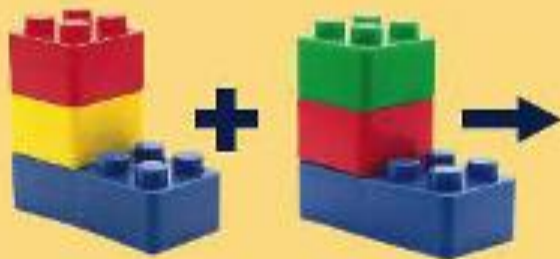
Lesson 3

ANSWER KEYS

Model It! p. 67

**Model
It!**

The blocks are combined to show two different substances.
Draw how you could rearrange the blocks to make two other
substances. Use all six blocks.



Model It! p. 68

Model It!

In this diagram, each orange particle has a mass of 4 grams, and each red particle has a mass of 1 gram. Write the combined mass of the particles in each space below the word equation.



iron

+



oxygen



rust

16 g

+

6



22